



HSML Pre-Algebra Course Preparedness Test

High School Math Live wants parents to be well informed. We want your student to be placed in the appropriate course so that they will be successful and challenged while learning the beauty of mathematics. The questions we have below will be a good indicator to whether your student is ready for Pre-Algebra. Completing approximately 80% correctly is a good sign that your student is ready for this course. If your student struggles with the majority of the questions, then you and your student will need to discuss your plans. Will your student simply need to allow more time for math this year? Will your student need a private tutor? Will your student put forth the effort needed in order to be successful? We cannot answer these questions for you, but we want you to know prior to the school year what skills are needed for this course.

The answer key is provided at the end of the document. We ask that you sit down with your student and discuss their work. It is very important that you are aware of their results so that informative decisions can be made. After completing these problems, if you find that there are concepts that your student has not mastered, our [Brush Up on Math workshops](#) would be a great way to get targeted help on those concepts. If you feel that input from an instructor of the course would be helpful, please scan their work and answers, making sure that the answers are in the same order as the problems on the document. The scan should be emailed as a single PDF document to support@highschoolmathlive.com.

Please view our website, www.highschoolmathlive.com, to read other details including what makes a successful HSML student and online learner.

For these questions, no calculator should be used.

Part 1. Simplify the following.

1. $5.4 - 2.67$

7. $7 + 3 \cdot 4$

13. $\frac{2}{3} \times \frac{9}{4}$

2. $13.2 - 5.36$

8. $4(2 + 7) \div 2$

14. $\frac{1}{6} \div \frac{5}{12}$

3. $23.8 + 32.43$

9. $|-3|$

15. $\frac{5}{3} + \frac{7}{2}$

4. 0.4×0.31

10. $\frac{42}{7}$

5. $33.6 \div 4.2$

11. $\frac{2}{3} + \frac{3}{4}$

6. 0.23×10^2

12. $\frac{8}{5} - \frac{7}{5}$

Part 2. Algebra Equations. Solve for x.

1. $4 + x = 13$

2. $x - 7 = 9$

3. $5 + x = 20$

Part 3. Rounding

1. Round 1.563 to the nearest whole number.
2. Round 4.013 to the nearest hundredth.

Part 4. Number Questions

1. Order these numbers from least to greatest: 421.41 501 632 508 421.647
2. What number is opposite of 2?
3. Are these expressions equivalent? $(2 \times 3) \times 5$ and $2 \times (3 \times 5)$
4. If 100 centimeters = 1 meter, how many centimeters are equivalent to 0.23 meters?
5. If 100 centimeters = 1 meter, how many meters are equivalent to 142 centimeters?
6. What is the greatest common factor of 18, 24 and 36.

Part 5. Fractions/Decimals

1. What fraction is equivalent to 0.03?
2. What is the improper fraction for $3\frac{3}{8}$?
3. What is the decimal that is equivalent to $\frac{20}{400}$?
4. What is the decimal that is equivalent to $5\frac{2}{5}$?
5. What is the least common denominator for $\frac{3}{4}$ and $\frac{2}{3}$?

Part 6. Evaluate the following expressions with the given values.

1. $4x - 2y$ if $x = 5$ and $y = 3$
2. $\frac{x(2y+x)-z}{2x+z}$ if $x = 5$, $y = 2$ and $z = 1$

Part 7. Miscellaneous Problems

1. If our class can paint 48 pictures per day (each day is equivalent to 8 hours), how many pictures can they paint per hour?
2. I will be making $4\frac{1}{2}$ inch cloth strips to go along one edge of a quilt. My quilt edge measures 81 inches. How many strips will I use if they are placed end to end along the edge?

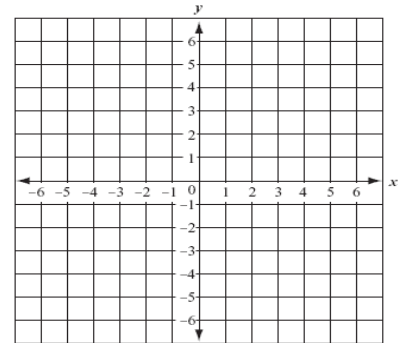
3. Plot the following points on the provided grid.

A (-2, -1)

B (4, -5)

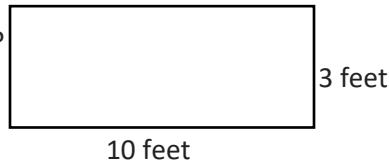
C (-6, 3)

D (3, 2)




Part 8. Geometry

1. What is the perimeter of this rectangle?



2. The figure is a square with side length 3 inches. What is the area of this square?



Answer Key:

Part 1

1. 2.73
2. 7.84
3. 56.23
4. 0.124
5. 8
6. 23
7. 19
8. 18
9. 3
10. 6
11. $\frac{17}{12}$ or $1\frac{5}{12}$
12. $\frac{1}{5}$
13. $\frac{3}{2}$
14. $\frac{2}{5}$
15. $\frac{31}{6}$ or $5\frac{1}{6}$

Part 2

1. 9
2. 16
3. 15

Part 3

1. 2
2. 4.01

Part 4

1. 421.41, 421.647, 501, 508, 632
2. -2
3. Yes
4. 23 cm
5. 1.42 m
6. 6

Part 5

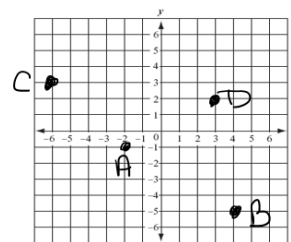
1. $\frac{3}{100}$
2. $\frac{27}{8}$
3. 0.05
4. 5.4
5. 12

Part 6

1. 14
2. 4

Part 7

1. 6 pictures
2. 18 strips
- 3.



Part 8

1. 26 feet
2. 9 in^2